



Name:		Class:	
Date:	Sunday, May 3 rd 2020	Concept:	Write a simple sentence/Write first and last name/Addition/Subtraction
Score:			

Write your first name.

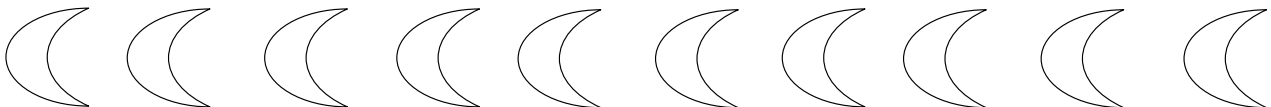
Write your last name.

Write a sentence using the word cat.

Circle the third star.



Circle the second moon.







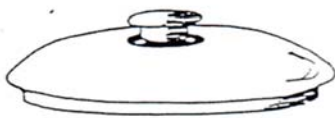

Solve addition and subtraction problems.

$7+3=$

$8-5=$

Name:		Class:	
Date:	Sunday, May 3 rd 2020	Concept:	Write the missing letter
Score:			

Write the missing letter.

 <p>h _ ll</p>	 <p>d _ g</p>
 <p>b _ n</p>	 <p>b _ b</p>
 <p>l _ d</p>	 <p>T _ m</p>




Name:		Class:	
Date:	Monday, May 4 th 2020	Concept:	Write numbers 1-20
Score:			

Writes Numbers 1-20:



Name:		Class:	
Date:	Monday, May 4 th 2020	Concept:	Write CVC words/more or less concept
Score:			

Write the CVC word for the picture.







Circle the group that has more



Circle the group that has less





Name:		Class:	
Date:	Tuesday, May 5 th 2020	Concept:	Fill in the missing numbers
Score:			

Fill in the boxes.

7	8	9		
---	---	---	--	--

2	3	4		
---	---	---	--	--

12	13	14		
----	----	----	--	--

8	9	10		
---	---	----	--	--

14	15	16		
----	----	----	--	--

6	7	8		
---	---	---	--	--


1	2	3		
---	---	---	--	--

Name:		Class:	
Date:	Tuesday, May 5 th 2020	Concept:	Write the missing letter
Score:			


Write the missing letter.



f _ _ n



h _ _ n



s _ _ ll



f _ _ t








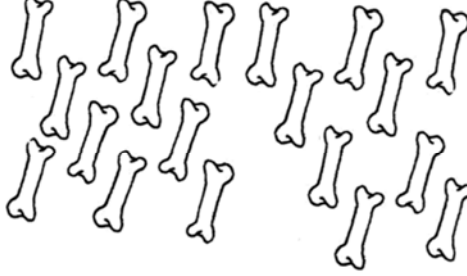
f _ _ n



b _ _ d







Name:		Class:	
Date:	Wednesday, May 6 th 2020	Concept:	Count and write the number of objects
Score:			

Count the objects and write the number on the line.

 _____ ----- _____	 _____ ----- _____
 _____ ----- _____	 _____ ----- _____
 _____ ----- _____	 _____ ----- _____

Name:		Class:	
Date:	Wednesday, May 6 th 2020	Concept:	Write the missing letter
Score:			

Write the missing letter.

 b _ _ ll	 h _ _ n
 m _ _ n	 t _ _ n
 j _ _ t	 s _ _ t

Name:		Class:	
Date:	Thursday, May 7 th 2020	Concept:	Addition/Subtraction using a number line
Score:			

Use the number line to solve the addition and subtraction problems.




$4 + 8 = \square$	$9 + 2 = \square$
$7 - 4 = \square$	$3 + 5 = \square$
$11 - 2 = \square$	$8 + 1 = \square$
$6 - 3 = \square$	$4 - 2 = \square$
$13 + 4 = \square$	$14 - 6 = \square$

Name:		Class:	
Date:	Thursday, May 7 th 2020	Concept:	Read and write a simple sentence
Score:			

Read the sentence. Write the sentence on the blank line.

I is a bib.



That is a lid.



I see the hill.