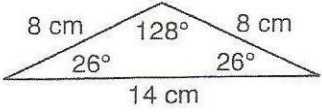
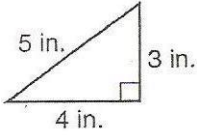
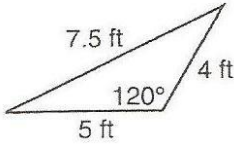
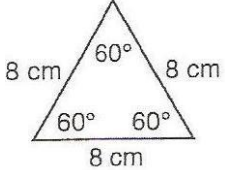
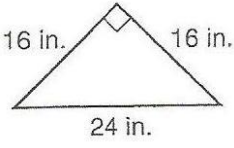


Classify each triangle by its **sides** and then by its **angles**.

| | | |
|----|---|------------|
| 1. |  | by sides: |
| | | by angles: |
| 2. |  | by sides: |
| | | by angles: |
| 3. |  | by sides: |
| | | by angles: |
| 4. |  | by sides: |
| | | by angles: |
| 5. |  | by sides: |
| | | by angles: |

The measures of two angles of a triangle are given. Find the measure of the third angle. Show your calculation.

| | | |
|----|---|--|
| 6. | 40°, 100°, ? | |
| 7. | 14°, 98°, ? | |
| 8. |  | |
| 9. |  | |